

LEARN FOR LIFE

ASSIGNMENT SHEET FOR THE MONTH OF AUGUST






Name : \_\_\_\_\_ ( 2024-2025 )

CLASS: 1<sup>ST</sup> ( )

Roll no. :

SUBJECT : MATHS

Q1. Write the missing numbers.

				
1	11	21	31	41
3	13	23	33	43
5	15	25	35	45
7	17	27	37	47
9		29		49
10	20	30	40	50

Q2. Write the number names.

a) 15 : \_\_\_\_\_

b) 50: \_\_\_\_\_

c) 39: \_\_\_\_\_

d) 44: \_\_\_\_\_

e) 20: \_\_\_\_\_

f) 33: \_\_\_\_\_

g) 40 : \_\_\_\_\_

h) 27 : \_\_\_\_\_

Q3. Rewrite the following numbers in ascending order.

a) 49, 33, 21, 16 : \_\_\_\_\_

b) 46, 35, 18, 29 : \_\_\_\_\_

c) 50, 26, 19, 30 : \_\_\_\_\_

d) 17, 22, 50, 34 : \_\_\_\_\_

Q4. Rewrite the following numbers in descending order.

a) 17, 22, 34, 50 : \_\_\_\_\_

b) 30, 47, 36, 19 : \_\_\_\_\_

c) 31, 27, 49, 50 : \_\_\_\_\_

d) 45, 35, 18, 23 : \_\_\_\_\_

Q5. What comes after.?

a) 49 : \_\_\_\_\_

b) 33 : \_\_\_\_\_

c) 28 : \_\_\_\_\_

Q6. What comes before?

a) \_\_\_\_\_ : 33

b) \_\_\_\_\_ : 50

c) \_\_\_\_\_ : 19

Q7. What comes in between ?

a) 46 \_\_\_\_ 48

b) 38 \_\_\_\_ 40

c) 23 \_\_\_\_ 25

Q8. Circle the biggest number.

a) 29, 40, 39, 50

Q9. Circle the smallest number.

a) 50, 46, 33, 28

